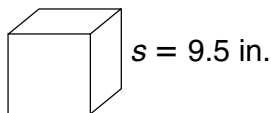


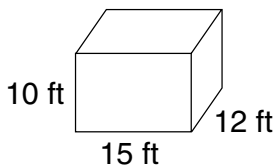
LESSON
10-7 **Practice B**
Volume of Prisms

Find the volume of each rectangular prism.

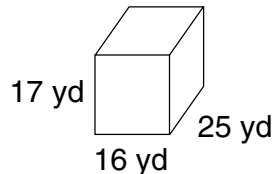
1.



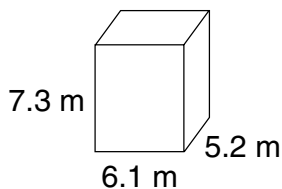
2.



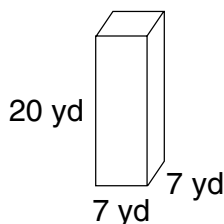
3.



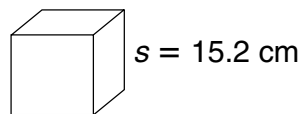
4.



5.

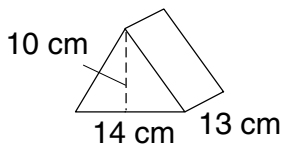


6.

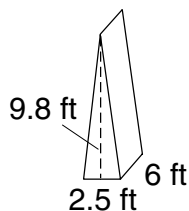


Find the volume of each triangular prism.

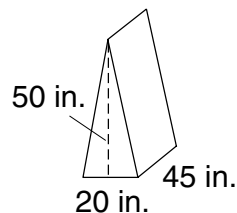
7.



8.



9.



10. Fawn built a sandbox that is 6 feet long, 5 feet wide, and $\frac{1}{2}$ foot tall. How many cubic feet of sand does she need to fill the box?

11. Unfinished lumber is sold in units called board feet. A board foot is the volume of lumber contained in a board 1 inch thick, 1 foot wide, and 1 foot long. How many cubic inches of wood are in 1 board foot?
