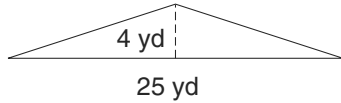


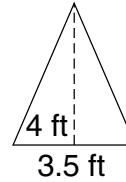
LESSON **Practice B**
10-2 *Area of Triangles and Trapezoids*

Find the area of each triangle.

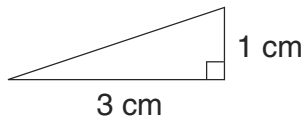
1.



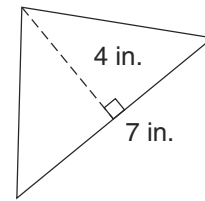
2.



3.

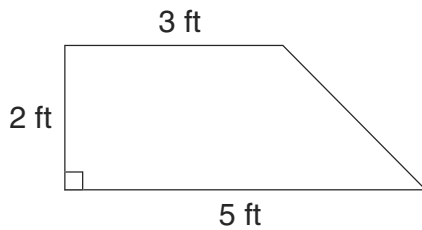


4.

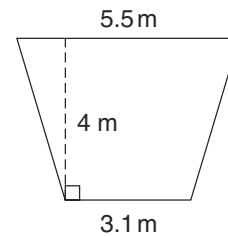


Find the area of each trapezoid.

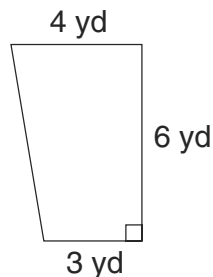
5.



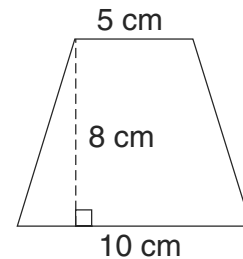
6.



7.



8.



9. The front part of a tent is 8 feet long and 5 feet tall. What is the area of the front part of the tent?

